


Name _____

Date _____

1. Draw more apples to solve $4 + ? = 6$.

$$\boxed{4} + \boxed{} = \boxed{6}$$



I added _____ apples to the tree.

2. How many more to make 7?


$$\boxed{5} + \boxed{} = \boxed{7}$$

3. How many more to make 8?

$$\boxed{6} + \boxed{} = \boxed{8}$$


4. How many more to make 9?

$$\boxed{7} + \boxed{} = \boxed{9}$$


$$\boxed{3} + \boxed{1} = \boxed{4}$$


5. Count on to add. **Circle** the strategy you used to keep track.

a. $\boxed{4} + \boxed{} = \boxed{5}$



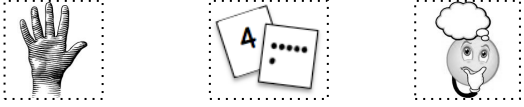
b. $\boxed{4} + \boxed{} = \boxed{7}$



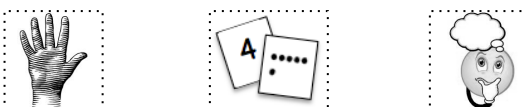
c. $\boxed{8} = \boxed{5} + \boxed{}$



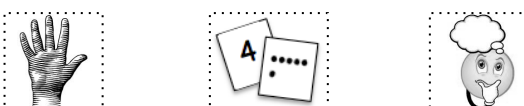
d. $\boxed{10} = \boxed{} + \boxed{8}$



e. $\boxed{7} + \boxed{} = \boxed{8}$



f. $\boxed{} + \boxed{5} = \boxed{7}$



g. $\boxed{8} = \boxed{6} + \boxed{}$



h. $\boxed{10} = \boxed{} + \boxed{7}$

