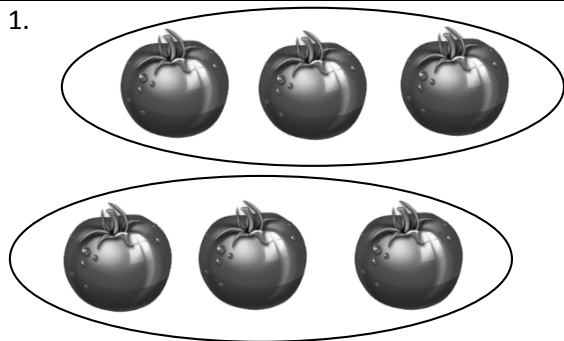


Name \_\_\_\_\_

Date \_\_\_\_\_



Divide 6 tomatoes into groups of 3.

There are \_\_\_\_\_ groups of 3 tomatoes.


$$6 \div 3 = 2$$



Divide 8 lollipops into groups of 2.

There are \_\_\_\_\_ groups.

$$8 \div 2 = \underline{\hspace{2cm}}$$



Divide 10 stars into groups of 5.

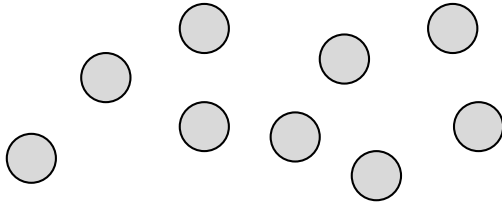
$$10 \div 5 = \underline{\hspace{2cm}}$$



Divide the shells to show  $12 \div 3 = \underline{\hspace{2cm}}$ , where the unknown represents the number of groups.

How many groups are there? \_\_\_\_\_

5. Rachel has 9 crackers. She puts 3 crackers in each bag. Circle the crackers to show Rachel's bags.



- a. Write a division sentence where the answer represents the number of Rachel's bags.
- b. Draw a number bond to represent the problem.
6. Jameisha has 16 wheels to make toy cars. She uses 4 wheels for each car.
- a. Use a count-by to find the number of cars Jameisha can build. Make a drawing to match your counting.
- b. Write a division sentence to represent the problem.