

Name: \_\_\_\_\_

Date: \_\_\_\_\_



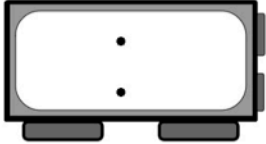
# Telling Time

## Half Hour Worksheet 1

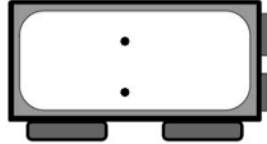


Write the time inside each clock below.

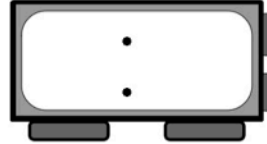
1)



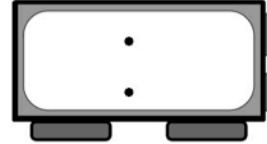
2)



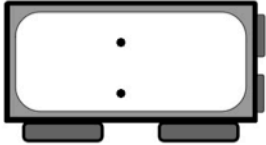
3)



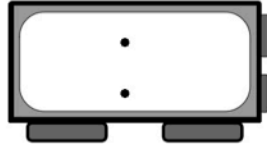
4)



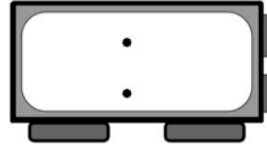
5)



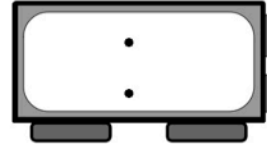
6)



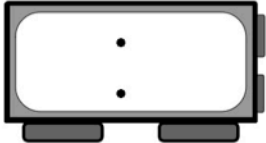
7)



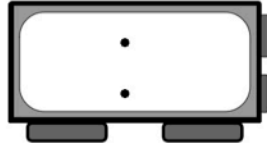
8)



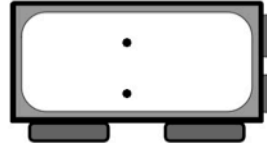
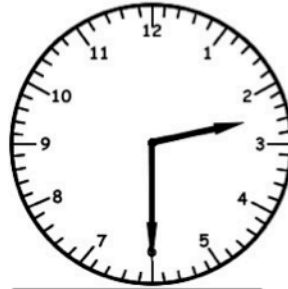
9)



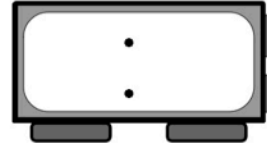
10)



11)



12)



Name: \_\_\_\_\_

Date: \_\_\_\_\_



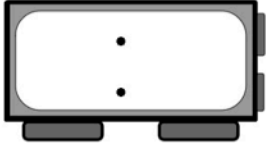
# Telling Time

## Half Hour Worksheet 2

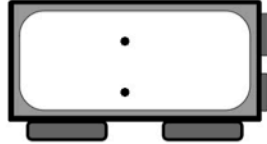


Write the time inside each clock below.

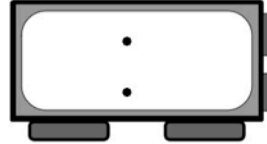
1)



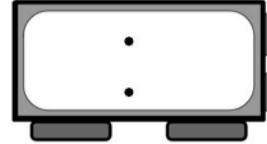
2)



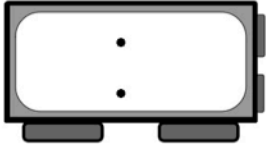
3)



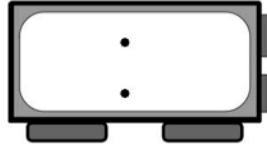
4)



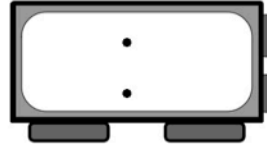
5)



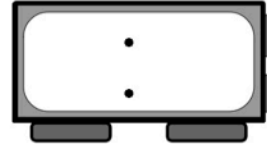
6)



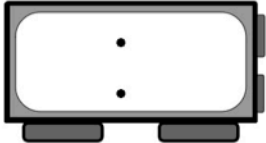
7)



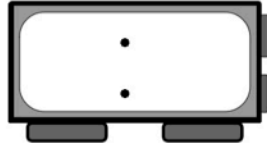
8)



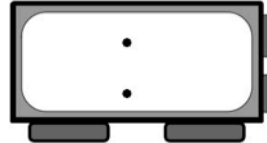
9)



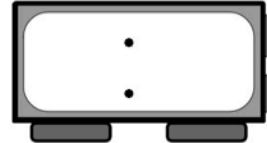
10)



11)



12)



Name: \_\_\_\_\_

Date: \_\_\_\_\_



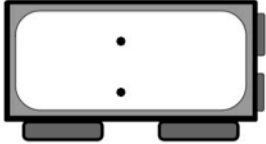
# Telling Time

## Half Hour Worksheet 3

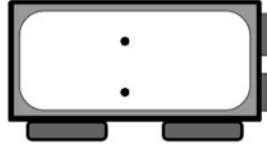


Write the time inside each clock below.

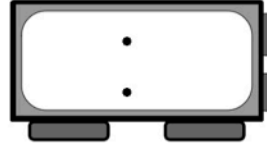
1)



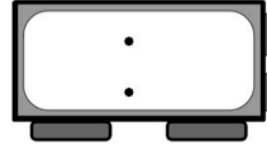
2)



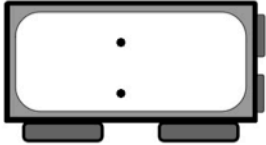
3)



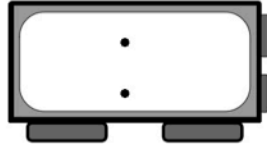
4)



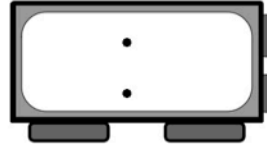
5)



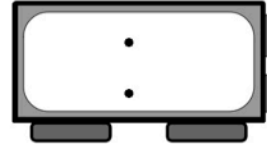
6)



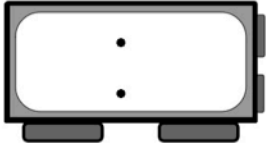
7)



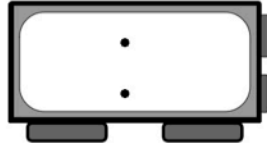
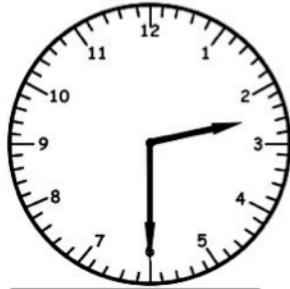
8)



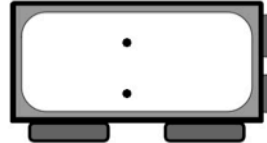
9)



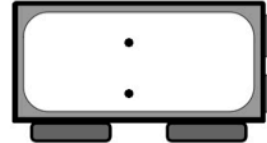
10)



11)



12)



Name: \_\_\_\_\_

Date: \_\_\_\_\_



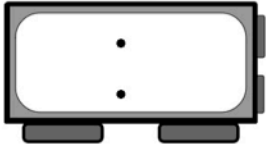
# Telling Time

## Half Hour Worksheet 4

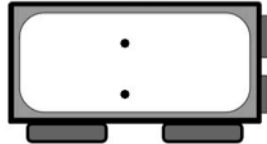


Write the time inside each clock below.

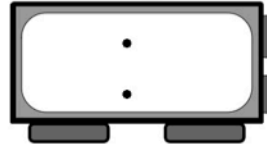
1)



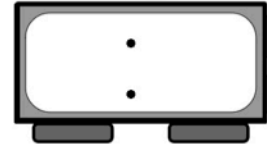
2)



3)



4)



5)



6)



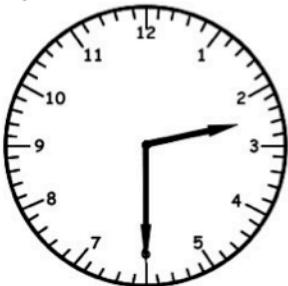
7)



8)



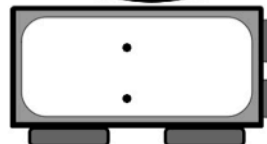
9)



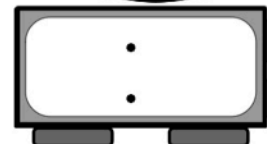
10)



11)



12)



Name: \_\_\_\_\_

Date: \_\_\_\_\_



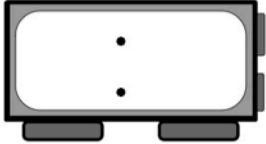
# Telling Time

## Half Hour Worksheet 5

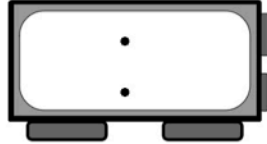


Write the time inside each clock below.

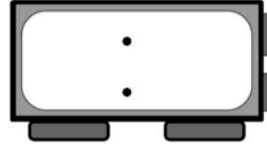
1)



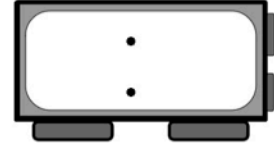
2)



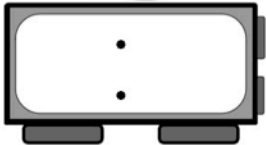
3)



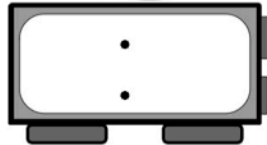
4)



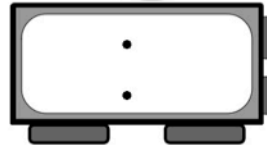
5)



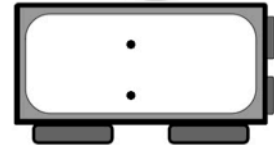
6)



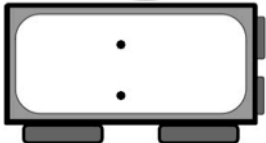
7)



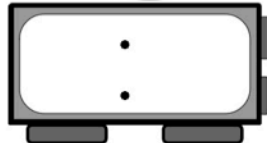
8)



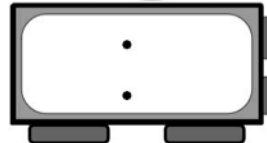
9)



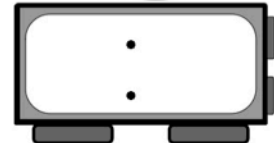
10)



11)



12)



Name: \_\_\_\_\_

Date: \_\_\_\_\_



# Telling Time Half Hour **Answer Key**



Worksheets 1-5

## Worksheet 1

1)10:30    2)8:00    3)7:00    4)11:00

5)1:30    6)6:00    7)9:30    8)12:00

9)3:30    10)1:00    11)2:30    12)4:00

## Worksheet 2

1)8:00    2)7:30    3)9:00    4)10:00

5)12:30    6)9:30    7)7:00    8)3:00

9)6:00    10)5:30    11)2:00    12)4:30

## Worksheet 3

1)1:00    2)6:00    3)1:30    4)9:30

5)11:00    6)10:00    7)7:00    8)4:30

9)4:00    10)2:30    11)6:30    12)12:30

## Worksheet 4

1)7:00    2)1:30    3)10:00    4)3:30

5)7:00    6)9:30    7)11:30    8)2:00

9)2:30    10)3:00    11)4:30    12)6:30

## Worksheet 5

1)4:00    2)4:30    3)5:00    4)5:30

5)12:00    6)11:00    7)6:00    8)7:30

9)5:00    10)3:00    11)10:30    12)10:00